

Suggested Math Plans
April 6-10

Day 1	<ul style="list-style-type: none">○ Day 1: RCS Individual Learning Module Week 1○ Complete the activity on Page 3-4○ Complete IXL Lessons: W.11
Day 2	<ul style="list-style-type: none">○ Day 2: RCS Individual Learning Module Week 1○ Fractions On a Number Line Quizizz: Code 210843 to play against your fellow third graders!
Day 3	<ul style="list-style-type: none">○ Day 3: RCS Individual Learning Module Week 1○ Flip and Match Fraction Game (Attached below)○ Complete IXL Lessons: W.13
Day 4	<ul style="list-style-type: none">○ Day 4: RCS Individual Learning Module Week 1○ Fractions Greater than One Quizizz: Code 705619 to play against your fellow third graders!○ Complete IXL Lessons: W.15
Day 5	<ul style="list-style-type: none">○ Day 5: RCS Individual Learning Module Week 1○ Complete IXL Lessons: X.8

Bonus Activities!

- IXL Lessons: X.3, X.4,X.5,
- Fractions on a number line Quizlet Match
 - <https://quizlet.com/385531845/match>
- Fractions Greater Than One Task Cards (Attached)

FLIP & MATCH

$$\frac{2}{3}$$

FLIP & MATCH

$$\frac{1}{3}$$

FLIP & MATCH

$$\frac{1}{4}$$

FLIP & MATCH

$$\frac{3}{4}$$

FLIP & MATCH

$$\frac{6}{6}$$

FLIP & MATCH

$$\frac{2}{6}$$

FLIP & MATCH

$$\frac{4}{6}$$

FLIP & MATCH

$$\frac{4}{8}$$

FLIP & MATCH

$$\frac{7}{8}$$

FLIP & MATCH

$$\frac{5}{5}$$

FLIP & MATCH

$$\frac{2}{4}$$

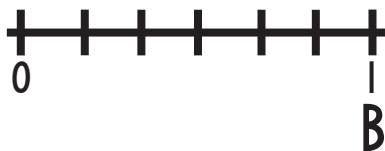
FLIP & MATCH

$$\frac{2}{5}$$

WHAT FRACTION IS MISSING?



WHAT FRACTION IS MISSING?



WHAT FRACTION IS MISSING?



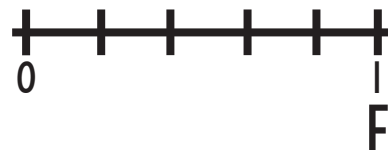
WHAT FRACTION IS MISSING?



WHAT FRACTION IS MISSING?



WHAT FRACTION IS MISSING?



WHAT FRACTION IS MISSING?



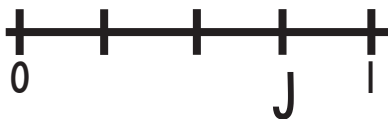
WHAT FRACTION IS MISSING?



WHAT FRACTION IS MISSING?



WHAT FRACTION IS MISSING?

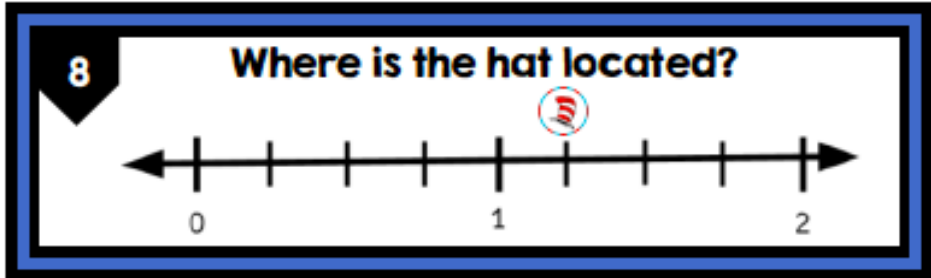

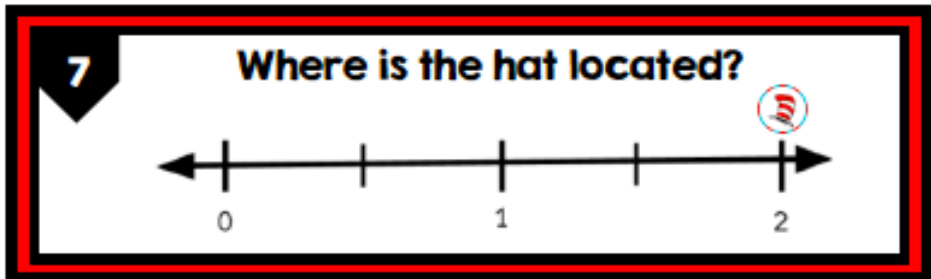




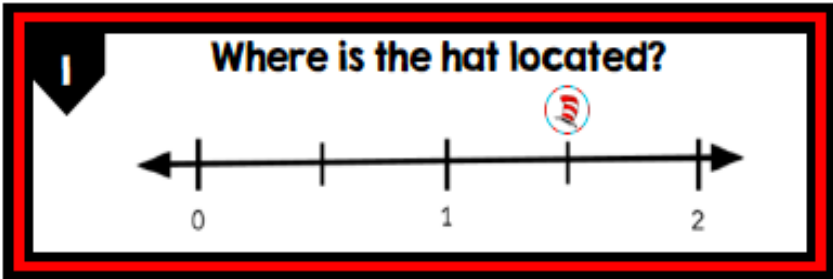


WHAT FRACTION IS MISSING?



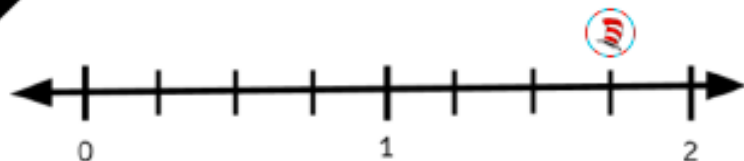
WHAT FRACTION IS MISSING?





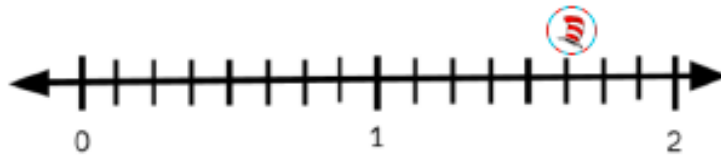
9

Where is the hat located?



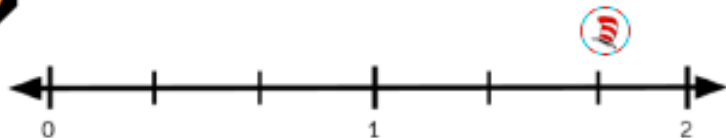
13

Where is the hat located?



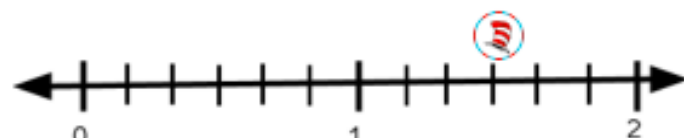
10

Where is the hat located?



14

Where is the hat located?



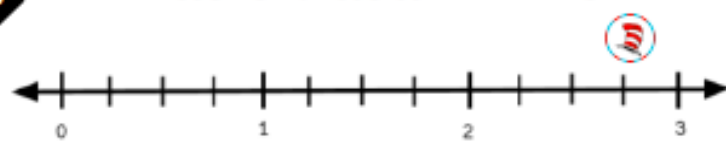
11

Where is the hat located?



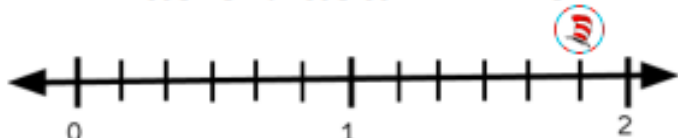
15

Where is the hat located?



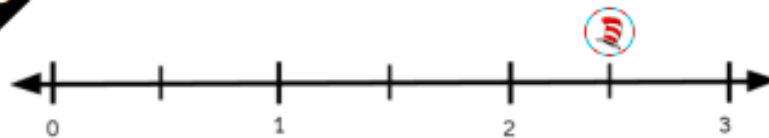
12

Where is the hat located?



16

Where is the hat located?

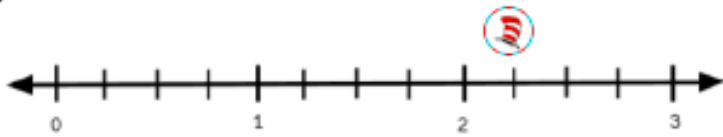


1	$\frac{3}{2}$	2	$\frac{6}{3}$	3	$\frac{8}{6}$	4	$\frac{4}{3}$
5	$\frac{15}{8}$	6	$\frac{10}{6}$	7	$\frac{4}{2}$	8	$\frac{5}{4}$
9	$\frac{7}{4}$	10	$\frac{5}{3}$	11	$\frac{9}{8}$	12	$\frac{11}{6}$

13	$\frac{13}{8}$	14	$\frac{9}{6}$	15	$\frac{11}{3}$	16	$\frac{5}{2}$
17	$\frac{9}{4}$	18	$\frac{6}{2}$	19	$\frac{11}{8}$	20	$\frac{12}{6}$
21	$\frac{10}{8}$	22	$\frac{7}{6}$	23	$\frac{12}{8}$	24	$\frac{10}{4}$

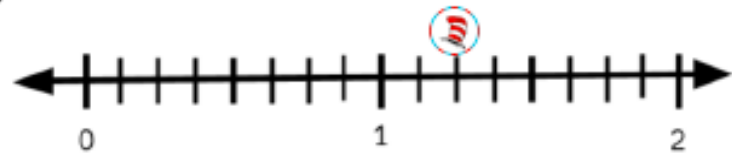
17

Where is the hat located?



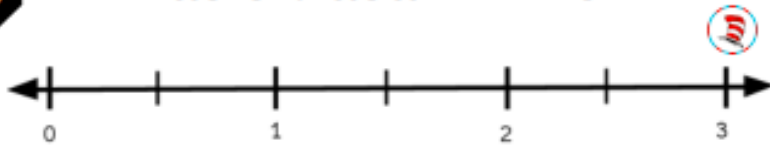
21

Where is the hat located?



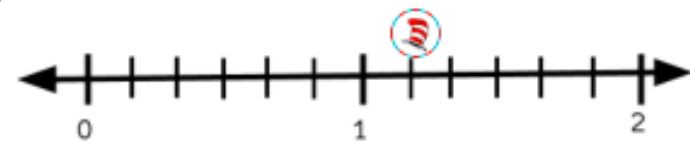
18

Where is the hat located?



22

Where is the hat located?



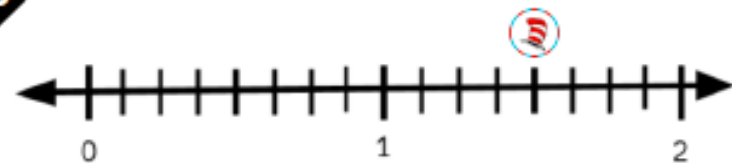
19

Where is the hat located?



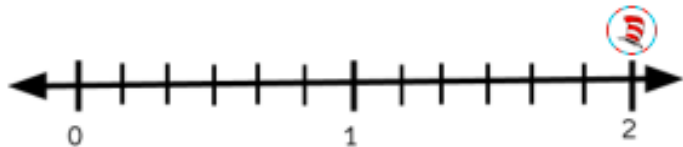
23

Where is the hat located?



20

Where is the hat located?



24

Where is the hat located?

